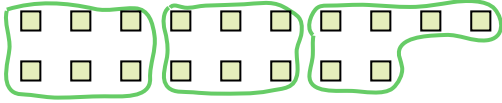







Use the shapes provided to answer the questions.

Ex) How many groups of 6 can you make with the 18 shapes below?




1) How many groups of 3 can you make with the 30 shapes below?




Answers

Ex. 3

2) How many groups of 4 can you make with the 28 shapes below?

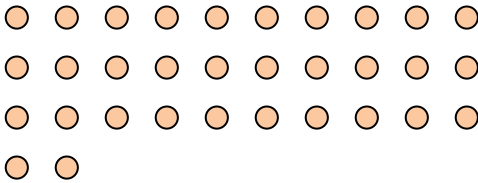


3) How many groups of 2 can you make with the 40 shapes below?

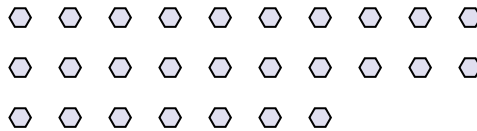


1. 10

4) How many groups of 4 can you make with the 32 shapes below?



5) How many groups of 9 can you make with the 27 shapes below?




2. 7

6) How many groups of 6 can you make with the 36 shapes below?




7) How many groups of 3 can you make with the 36 shapes below?

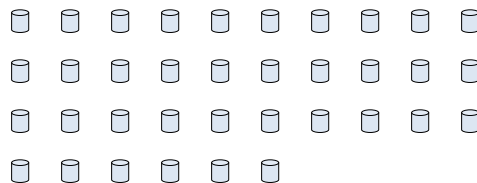


3. 20

8) How many groups of 6 can you make with the 36 shapes below?

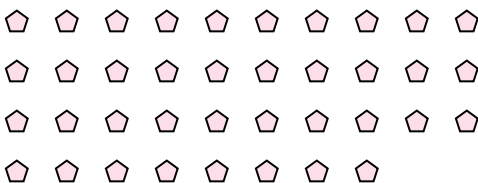


9) How many groups of 4 can you make with the 36 shapes below?



4. 8

10) How many groups of 2 can you make with the 38 shapes below?



11) How many groups of 7 can you make with the 14 shapes below?



5. 3

6. 6

7. 12

8. 6

9. 9

10. 19

11. 2